













IME: _____

ODŠTEVAM DO 10 – DRUGI LIST

RAČUNAJ, KOT KAŽE PRIMER. PREŠTEJ. PREČRTAJ. ODŠTEJ. ZAPIŠI REZULTAT.

$10 - 4 = 6$	
$\square - 1 = \square$	
$\square - 6 = \square$	
$\square - 2 = \square$	
$\square - 4 = \square$	
$\square - 8 = \square$	
$\square - 5 = \square$	
$\square - 3 = \square$	
$\square - 1 = \square$	
$\square - 5 = \square$	
$\square - 4 = \square$	
$\square - 6 = \square$	
$\square - 2 = \square$	